

Reflection of Light

EXERCISE [PAGE 115]

Exercise | Q 1.1 | Page 115

Fill in the blanks

The perpendicular to the mirror at the point of incidence is called _____ .

Solution: The perpendicular to the mirror at the point of incidence is called normal.

Exercise | Q 1.2 | Page 115

Fill in the blanks

The reflection of light from a wooden surface is _____ reflection.

Solution: The reflection of light from a wooden surface is diffused reflection.

Exercise | Q 1.3 | Page 115

Fill in the blanks

The working of Kaleidoscope is based on the properties of _____.

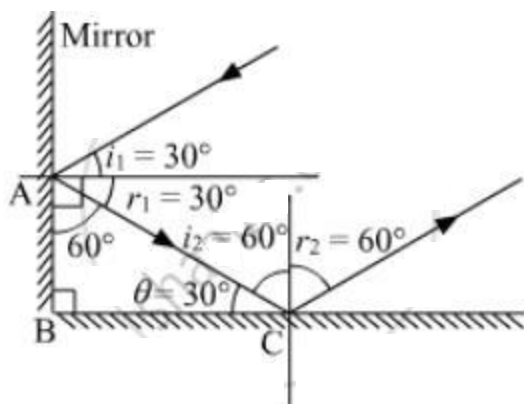
Solution: The working of Kaleidoscope is based on the properties of reflection of light.

Exercise | Q 2 | Page 115

Draw a figure describing the following.

The reflecting surface of two mirrors make an angle of 90° with each other. If a ray incident on one mirror has an angle of incidence of 30° , draw the ray reflected from the second mirror. What will be its angle of reflection?

Solution: Let r_2 be the angle of reflection from the second mirror.



From laws of reflection,

$$\angle i_1 = \angle r_1 = 30^\circ$$

Now in $\triangle ABC$

$$\theta = 180^\circ - 90^\circ - 60^\circ = 30^\circ$$

$$\Rightarrow i_2 = 60^\circ$$

$$\text{Hence, } r_2 = 60^\circ$$

The angle of reflection of incident ray is 60° .

Exercise | Q 3 | Page 115

How will you explain the statement 'we cannot see the objects in a dark room'?

Solution: Light enables us to see objects around us. We see an object when light falls on it and gets reflected from its surface and enters our eyes. In a dark room, there is no source of light. Thus, no light falls on the surface of objects and hence we do not see them. This is why we cannot see the objects in a dark room.

Exercise | Q 4 | Page 115

Explain the differences between regular and irregular reflection light.

Solution:

Regular reflection of light	Irregular reflection of light
-----------------------------	-------------------------------

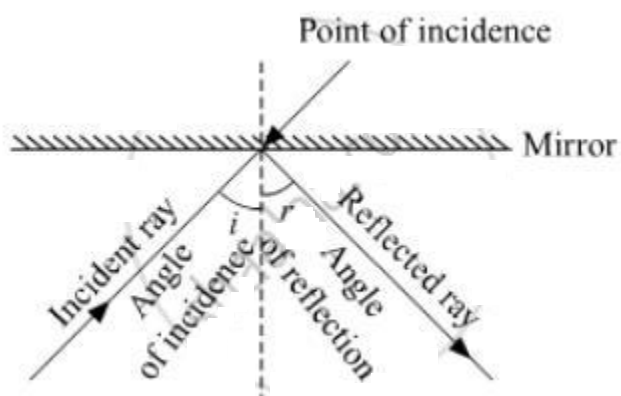
This type of reflection occurs on smooth surfaces such as a plane mirror.	This type of reflection occurs on rough surfaces such as a black board.
In this type of reflection, the reflected rays are parallel to each other.	In this type of reflection, the reflected rays are non-parallel to each other.
In this type of reflection, the reflected rays are in one direction.	In this type of reflection, the reflected rays are in different direction.

Exercise | Q 5 | Page 115

Draw a figure showing the following

- Incident Ray
- Angle of incidence
- Angle of reflection
- Point of incidence
- Reflected ray

Solution:



Exercise | Q 6 | Page 115

Study the following incident.

Swara and Yash were looking in a water filled vessel. They could see their images clearly in the still water. At that instant, Yash threw a stone in the water. Now their images were blurred. Swara could not understand the reason for the blurring of the images.

Explain the reason for blurring of the images to swara by answering the following questions.

- Is there a relation between the reflection of light and the blurring of the images.?

ii. Which types of reflection of light can you notice from this?

iii. Are laws of reflection followed in these types of reflection?

Solution: i. Yes, there is a relation between the reflection of light and blurring of the images.

ii. Initially, the water was still and its surface was smooth. Thus, regular type of reflection was taking place from its surface i.e. all the light rays coming from Swara's body or Yash's body reflected in the same direction on hitting the water surface and reached our eyes. Because of this, we saw a clear image.

But when Yash threw a stone in the water, the water surface became rough due to which irregular type of reflection of light occurred on its surface i.e all the light rays coming from Swara's body or Yash's body reflected in different directions on hitting the water surface. Thus, only some part of the reflected rays reached our eyes. Because of this, we see a blurred image.

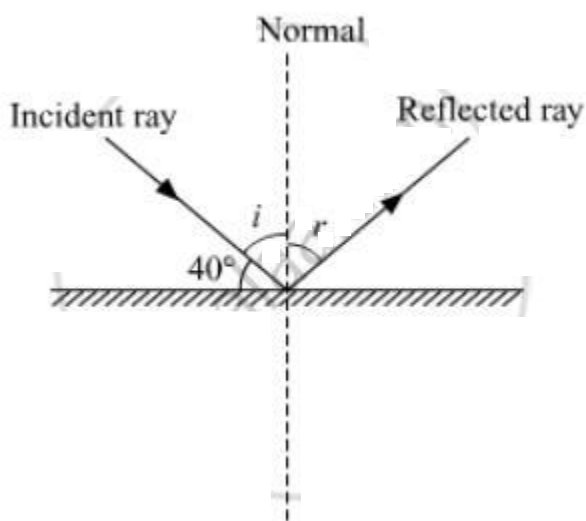
iii. Yes, laws of reflection are followed in both the types of reflection.

Exercise | Q 7.1 | Page 115

Solve the following example

If the angle between the plane mirror and the incident ray is 40° , what are the angles of incidence and reflection?

Solution:



$$\angle i + 40^\circ = 90^\circ$$

$$\Rightarrow \angle i = 50^\circ$$

Using law of reflection, we have

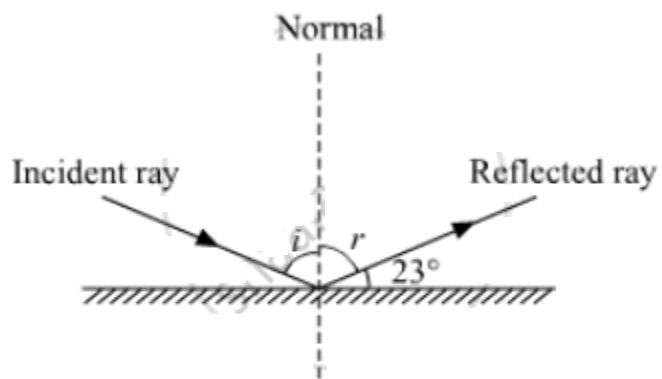
$$\angle i = \angle r = 50^\circ$$

Exercise | Q 7.2 | Page 115

Solve the following example.

If the angle between the mirror and reflected ray is 23° , what is the angle of incidence of the incidence ray?

Solution:



$$\angle r + 23^\circ = 90^\circ$$

$$\Rightarrow \angle r = 67^\circ$$

Using law of reflection , we have

$$\angle i = \angle r = 67^\circ$$